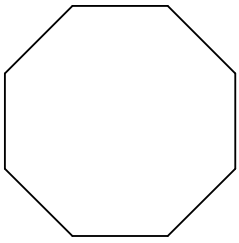


Polygons Review

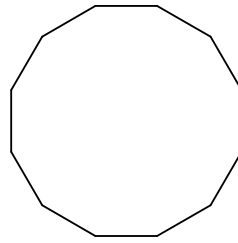
© 2012 Kuta Software LLC. All rights reserved.

Find the measure of one interior angle in each polygon. Round your answer to the nearest tenth if necessary.

1)

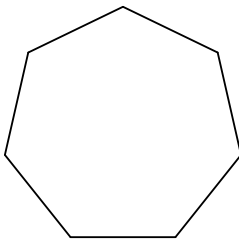


2)

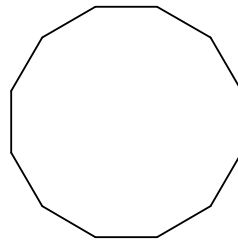


Find the measure of one exterior angle in each polygon. Round your answer to the nearest tenth if necessary.

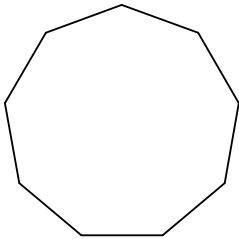
3)



4)

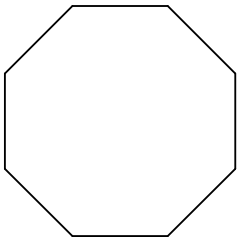


5)

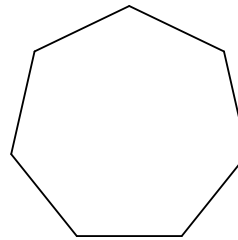


Find the interior angle sum for each polygon. Round your answer to the nearest tenth if necessary.

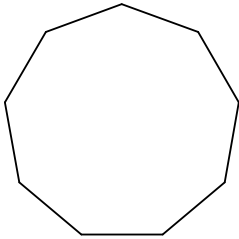
6)



7)

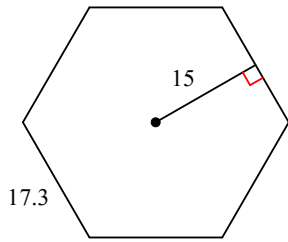


8)

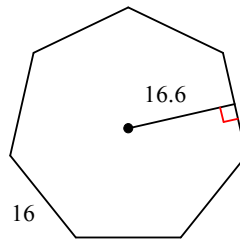


Find the area of each regular polygon. Round your answer to the nearest tenth if necessary.

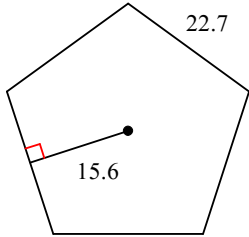
9)



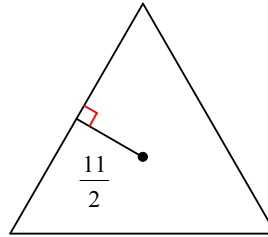
10)



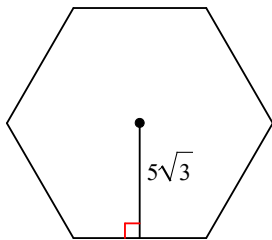
11)



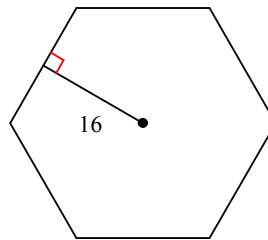
12)



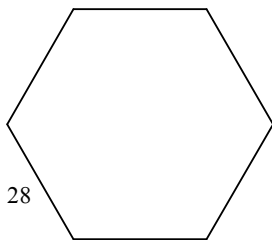
13)



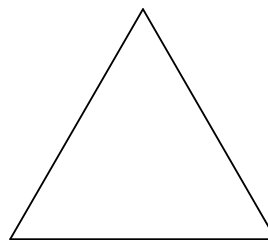
14)



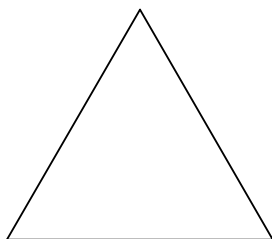
15)



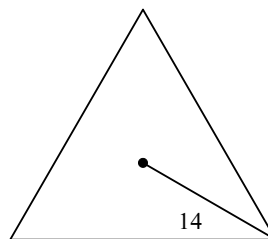
16)



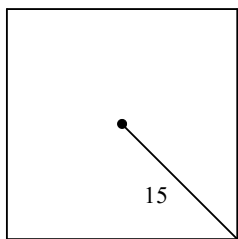
17)



18)



19)



20)

