

Holes

Name: _____

1. $f(x) = \frac{x^2+4x+4}{x+2}$

2. $f(x) = \frac{x^3-x^2-20x}{x^2-10x+25}$

3. $f(x) = \frac{x^2+8x+7}{x+1}$

4. $f(x) = \frac{x^2+10x}{x+10}$

5. $f(x) = \frac{x^3-x^2-20x}{x-5}$

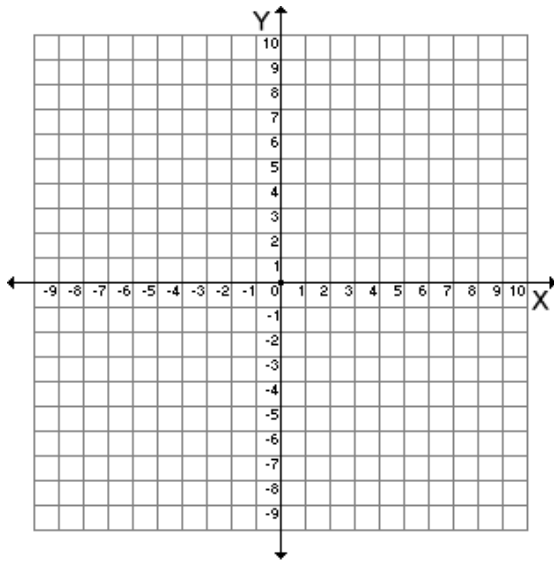
6. $f(x) = \frac{x^3+3x^2-28x}{x-4}$

7. $f(x) = \frac{x^3+7x^2+12x}{x^2+6x+9}$

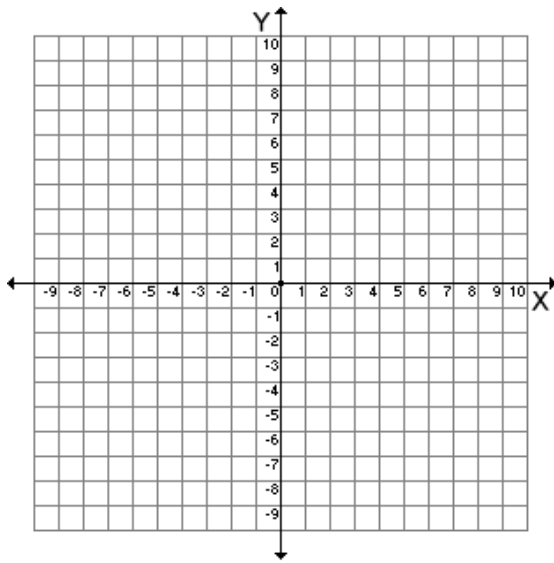
8. $f(x) = \frac{x^3+6x^2+8x}{x^2-4}$

9. $f(x) = \frac{x^2-16}{x^2+8x+16}$

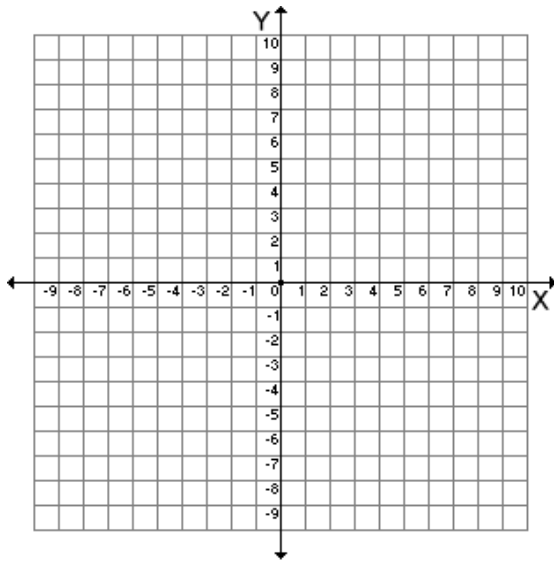
10. $f(x) = \frac{x^3-25x}{10x+50}$



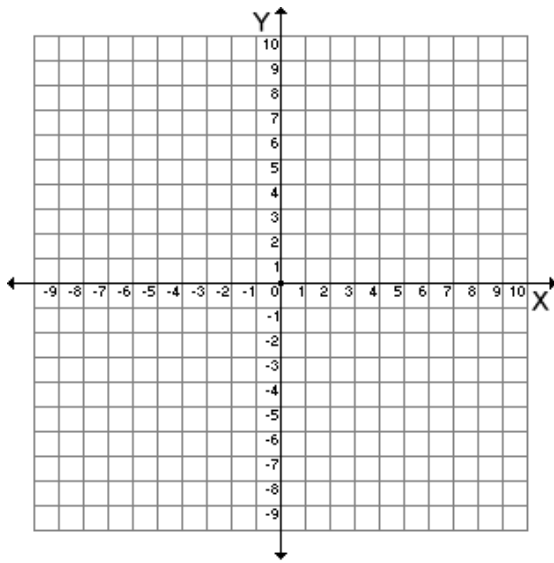
x	y
	-10
	-9
	-8
	-7
	-6
	-5
	-4
	-3
	-2
	-1
	0
	1
	2
	3
	4
	5
	6
	7
	8
	9
	10



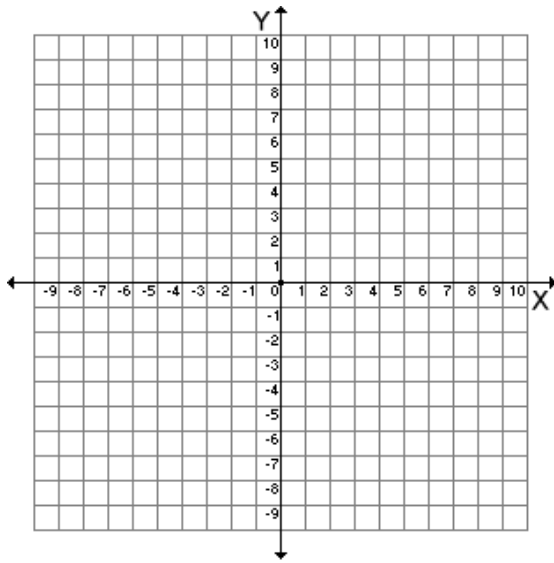
x	y
	-10
	-9
	-8
	-7
	-6
	-5
	-4
	-3
	-2
	-1
	0
	1
	2
	3
	4
	5
	6
	7
	8
	9
	10



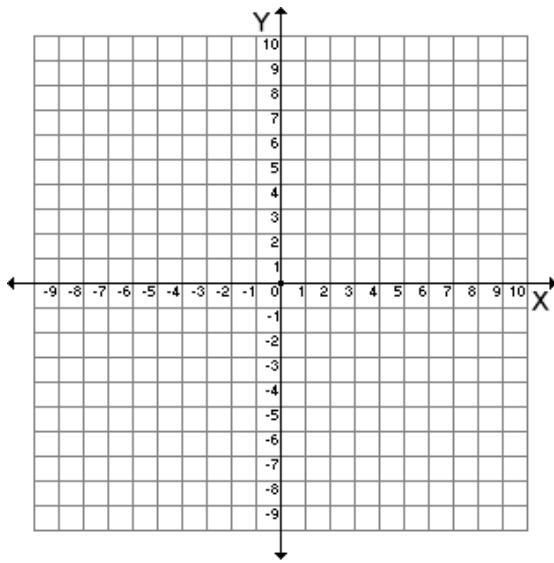
x	y
	-10
	-9
	-8
	-7
	-6
	-5
	-4
	-3
	-2
	-1
	0
	1
	2
	3
	4
	5
	6
	7
	8
	9
	10



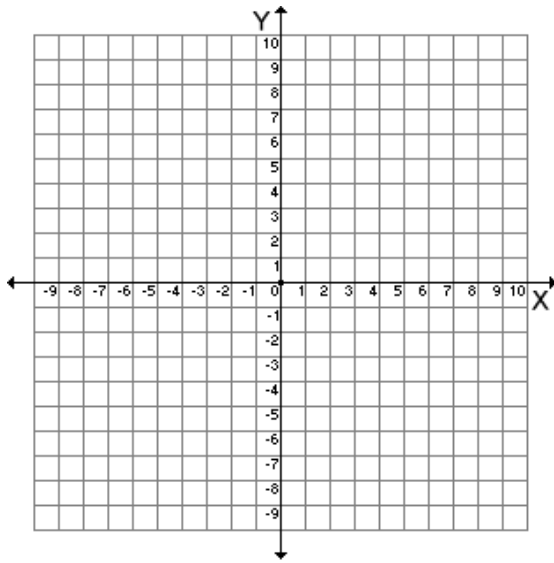
x	y
	-10
	-9
	-8
	-7
	-6
	-5
	-4
	-3
	-2
	-1
	0
	1
	2
	3
	4
	5
	6
	7
	8
	9
	10



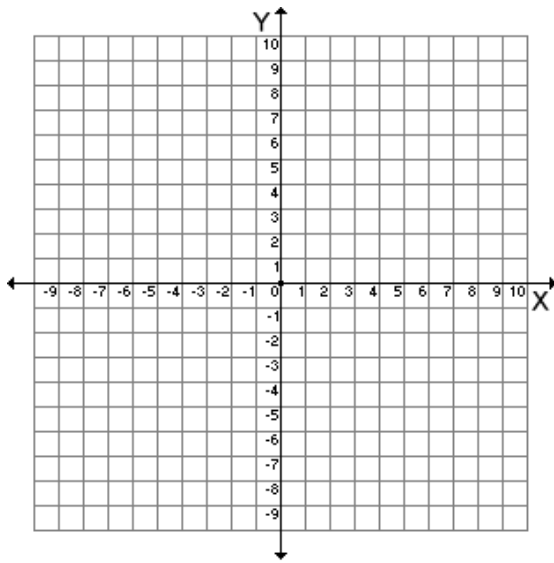
x	y
	-10
	-9
	-8
	-7
	-6
	-5
	-4
	-3
	-2
	-1
	0
	1
	2
	3
	4
	5
	6
	7
	8
	9
	10



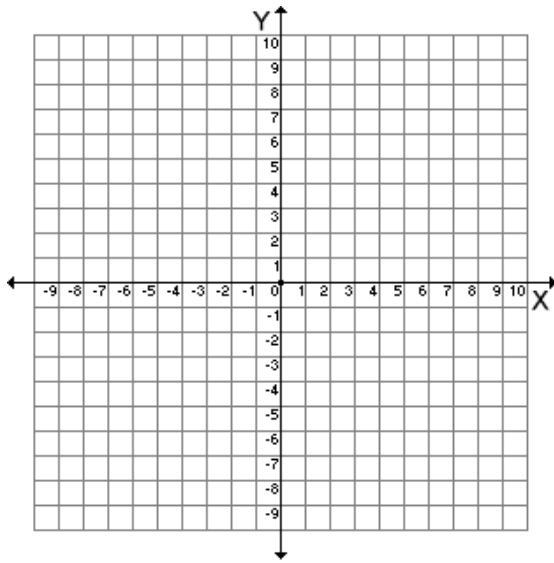
x	y
	-10
	-9
	-8
	-7
	-6
	-5
	-4
	-3
	-2
	-1
	0
	1
	2
	3
	4
	5
	6
	7
	8
	9
	10



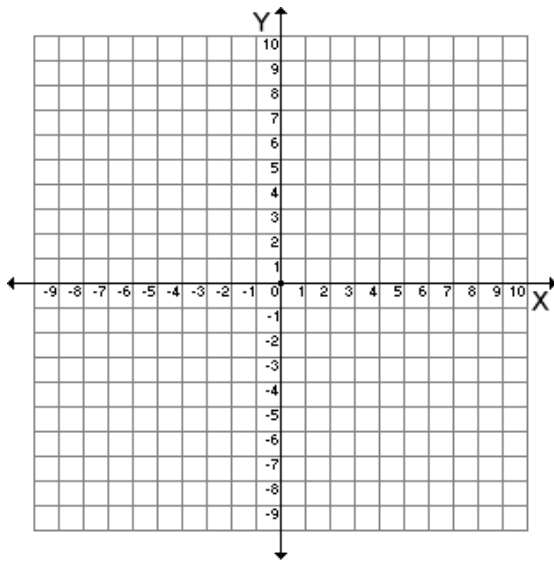
x	y
	-10
	-9
	-8
	-7
	-6
	-5
	-4
	-3
	-2
	-1
	0
	1
	2
	3
	4
	5
	6
	7
	8
	9
	10



x	y
	-10
	-9
	-8
	-7
	-6
	-5
	-4
	-3
	-2
	-1
	0
	1
	2
	3
	4
	5
	6
	7
	8
	9
	10



x	y
	-10
	-9
	-8
	-7
	-6
	-5
	-4
	-3
	-2
	-1
	0
	1
	2
	3
	4
	5
	6
	7
	8
	9
	10



x	y
	-10
	-9
	-8
	-7
	-6
	-5
	-4
	-3
	-2
	-1
	0
	1
	2
	3
	4
	5
	6
	7
	8
	9
	10