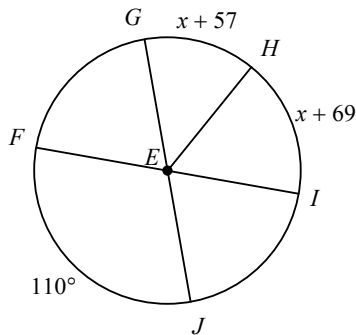


Finding Angle or Arc Measure with Central and Inscribed Angles Date _____

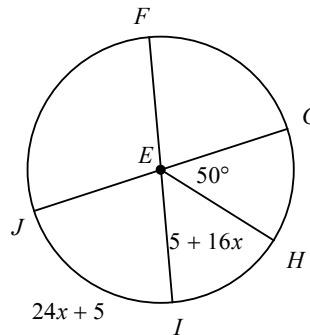
© 2012 Kuta Software LLC. All rights reserved.

Find the measure of the arc or central angle indicated. Assume that lines which appear to be diameters are actual diameters.

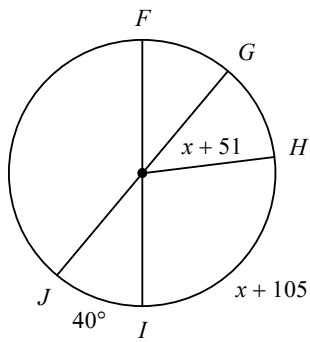
1) $m\angle GEH$



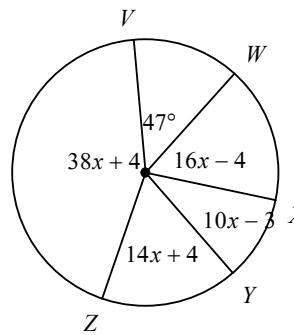
2) $m\angle IEJ$



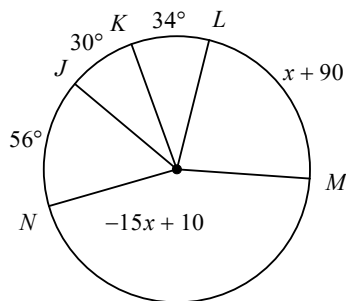
3) $m\widehat{HI}$



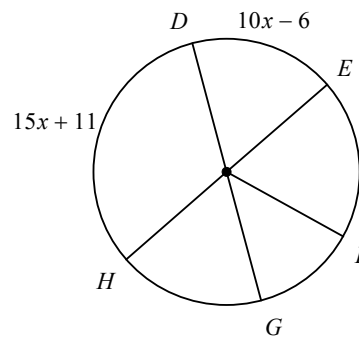
4) $m\widehat{ZV}$



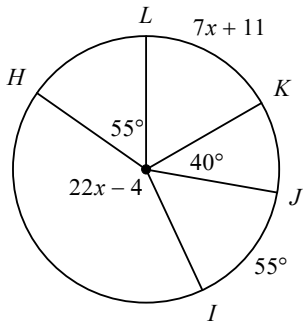
5) $m\widehat{LM}$



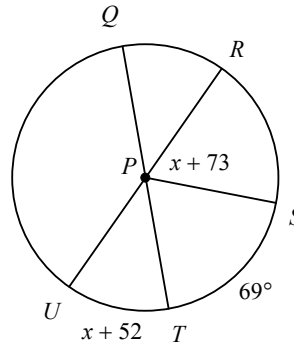
6) $m\widehat{HD}$



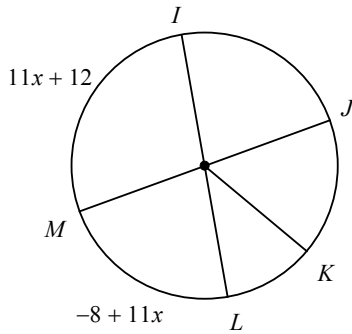
7) $m\widehat{IH}$



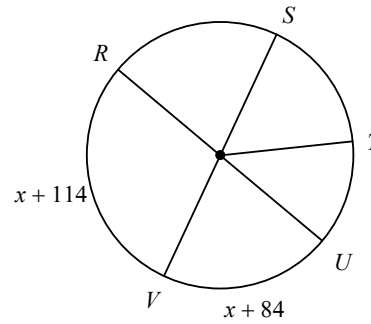
8) $m\angle UPQ$



9) $m\widehat{MI}$

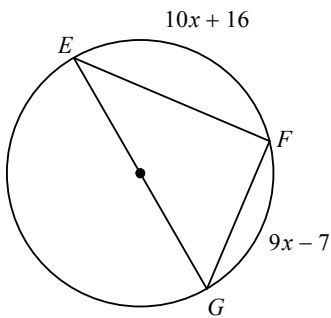


10) $m\widehat{VR}$

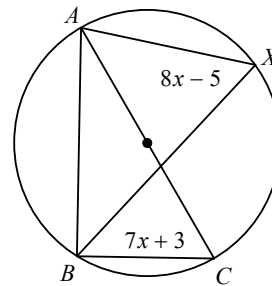


Find the measure of the arc or angle indicated.

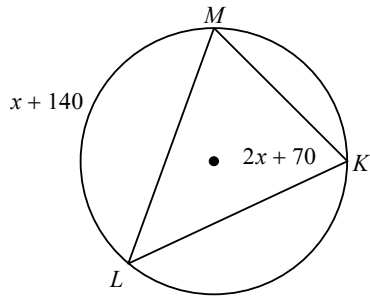
11) Find $m\angle GEF$



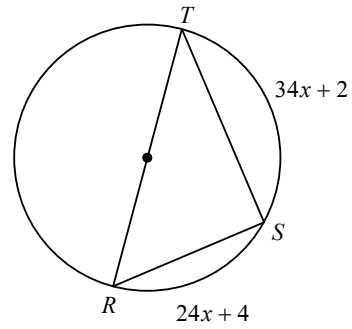
12) Find $m\widehat{BA}$



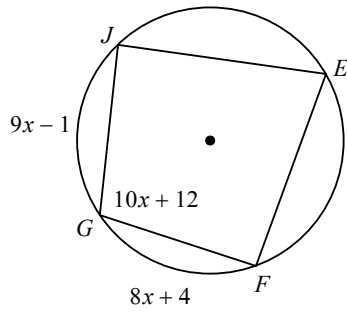
13) Find $m\widehat{LM}$



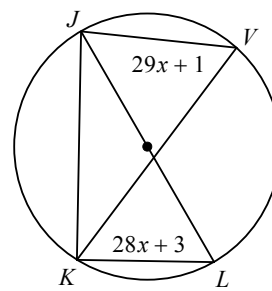
14) Find $m\widehat{SR}$



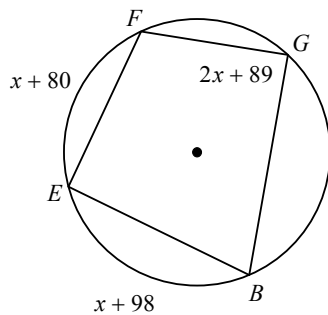
15) Find $m\widehat{FG}$



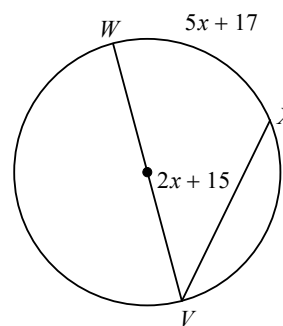
16) Find $m\widehat{KJ}$



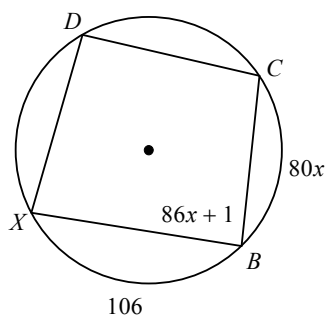
17) Find $m\angle BGF$



18) Find $m\widehat{WX}$



19) Find $m\widehat{CB}$



20) Find $m\widehat{CR}$

